



Seat No. \_\_\_\_\_

**HAI-161001010305**

**B. Architecture (Sem.-III) Examination**

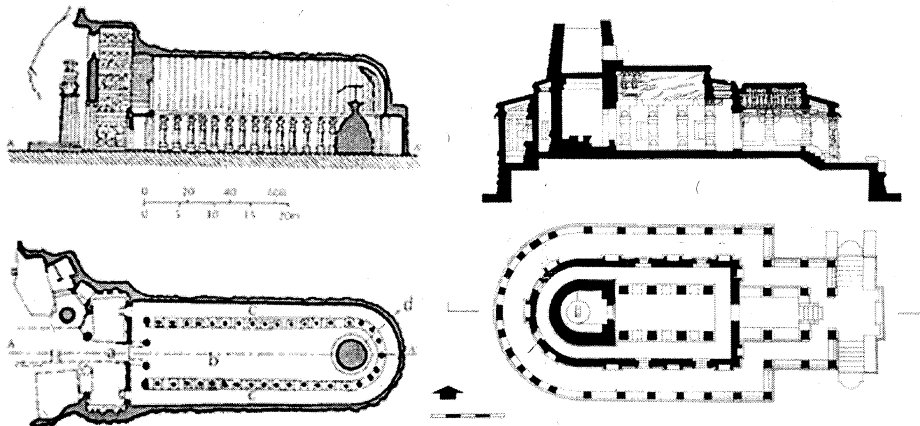
**May - 2023**

**History of Architecture-I**

**Time : 2 Hours / Total Marks : 50**

**1 Neatly Draw the following:**

**20**



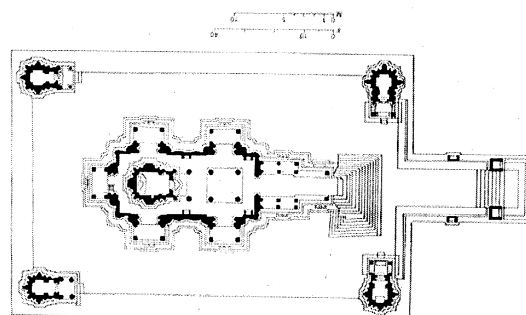
Explain ANY ONE in detail

**2 (A) Draw the following**

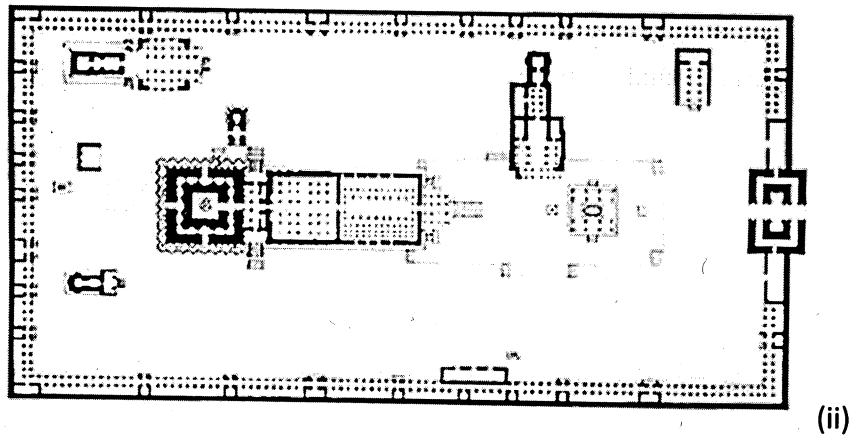
**(B) Identify the similarities and differences between the plans**

**20**

**(i) and (ii)**

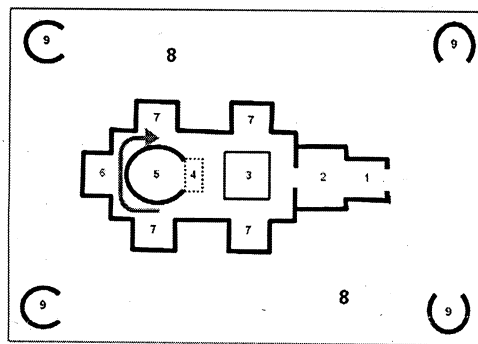


**(i)**

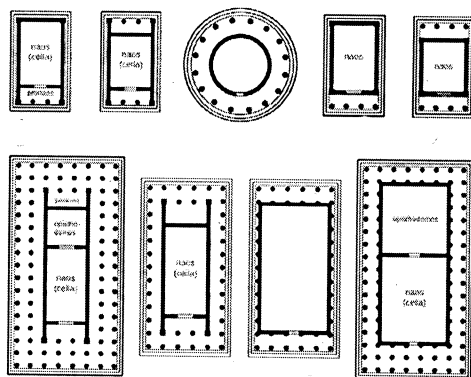


3 Attempt ANY ONE of the following: 10

- (a) Draw the following plan and identify the numbered elements in the plan.



- (b) Draw and Name the plan type of the following Greek temples.



- (c) Sketch ANY FIVE buildings (Plan + Section) of Greco-Roman Tradition: Temples, Theatres, Baths, Stoa, Aqueducts, Colosseum

- (d) Write in brief (ANY **TWO**):
- (a) Explain one River Valley Civilization.
  - (b) Write your understanding about the relationship of geography and architecture.
  - (c) Write your observations about temple as a religious place vs. temple as a public place.
  - (d) Write Short note on "Pyramids of Giza".
-